


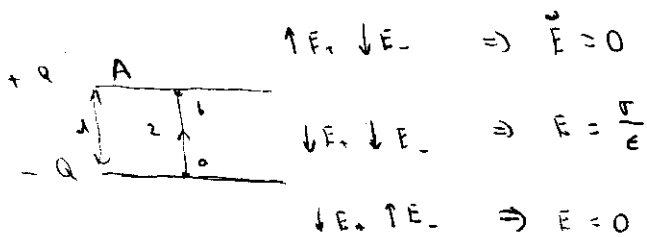
1.

Quiz 2b

$$\oint E \cdot da = Q_{in}/\epsilon_0$$

$$E \cdot 2A = \sigma A/\epsilon_0$$

$$E = \frac{\sigma}{2\epsilon_0}$$



$$\uparrow E, \downarrow E \Rightarrow \vec{E} = 0$$

$$\downarrow E, \downarrow E \Rightarrow E = \frac{\sigma}{\epsilon_0}$$

$$\downarrow E, \uparrow E \Rightarrow E = 0$$

$$V_{ab} = - \int_a^b E \cdot ds = - \int_0^d \frac{\sigma}{\epsilon_0} (-z) dz = \frac{\sigma}{\epsilon_0} d = \frac{Q}{A\epsilon_0} d$$

$$Q = CV \Rightarrow C = \frac{A\epsilon_0}{d}$$

a) $d \rightarrow 2d$
 $C \rightarrow C/2$
 $Q \rightarrow Q$
 $V \rightarrow 2AV$

d) $U = \frac{1}{2} \frac{Q^2}{C} = \frac{1}{2} CV^2$

$$V \rightarrow V_0$$

$$C \rightarrow C/2$$

$$U = U_0/2 = \frac{Q^2}{4C_0}$$

b) $P = IV = \frac{dQ}{dt} V$

$$U = \int P dV = \int_0^Q \frac{dQ'}{dt} \frac{Q'}{C} = \frac{1}{2} \frac{Q^2}{C}$$

$$Q \rightarrow Q$$

$$C \rightarrow C/2$$

$$U \rightarrow 2U = \frac{Q^2}{C_0}$$

c) Energy was added to the system by doing work against the electrical force to move the plates.

Notice: E remains the same in parts a-c but the volume it is affecting is doubled. In part d, E reduces to half its value.

Problem 2 (20 points)

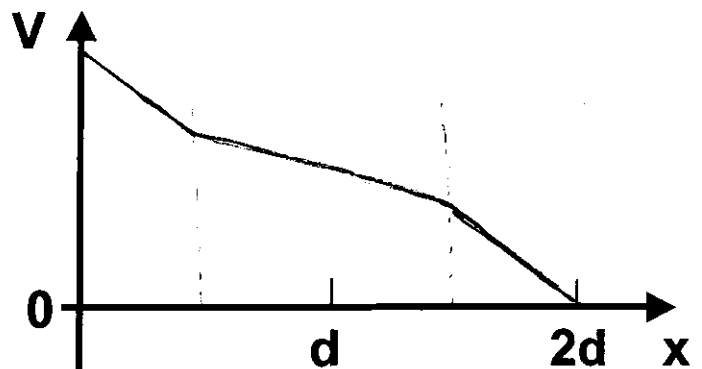
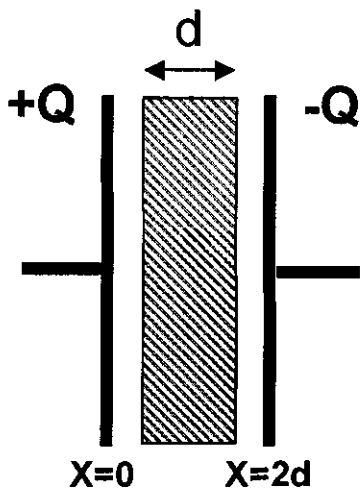
Shown below is the cross-section of a parallel plate capacitor with distance $2d$ between the plates. The capacitor is given a charge Q using a power supply and then disconnected from the power supply. Then a dielectric with thickness d and dielectric constant $K=2$ is inserted between the plates.

- (a) Does the stored energy increase, decrease or stay the same when the dielectric is inserted?

$$U = \frac{1}{2} \frac{Q^2}{C} \qquad C = \frac{C_0}{2} + K \frac{C_0}{2}$$

The energy decreases

- (b) On the graph below, draw a qualitative sketch of the electric potential between the capacitor plates as a function of x between $x=0$ and $x=2d$. At which value of x did you choose to set $V=0$?



I chose $x=2d$ as $V=0$

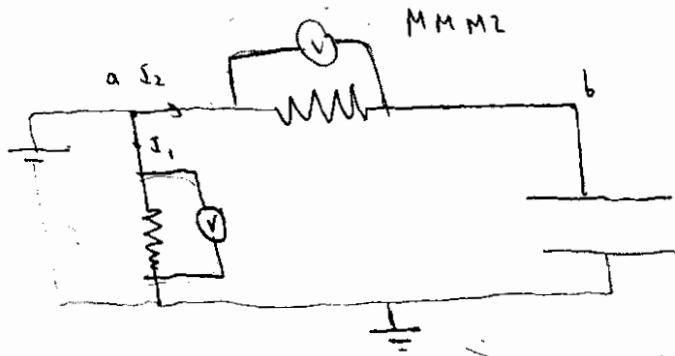

A different choice of $V=0$

would also give a correct result

(By moving this sketch up or down)

3.

I will draw the multimeters as :

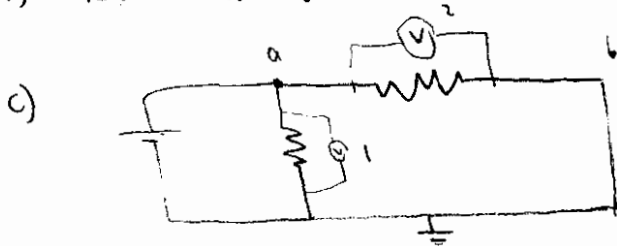


Ground shows any choice of $V=0$

before : $I_2 = 0$ (circuit is open) , $V_a = V_b$

a) $V = 400V$

b) $\Delta V = V_a - V_b = 0$



$V_b = 0$

d) $\Delta V = V_a - V_b = 380V$

e) The HVPS produces more current so there is a higher potential drop caused by the internal resistance of the HVPS

f) $V = E \cdot d = \frac{F}{m} d$

$F \rightarrow F$
 $m \rightarrow m$
 $d \rightarrow 2d$

} $V \rightarrow 2V$

MMM1 would read 800V

4.

$$a) P = IV = \frac{V^2}{R}$$

$$R_1 = \frac{V^2}{P} = \frac{144}{36} = 4 \Omega$$

$$b) P = IV = I^2 R$$

Since they have the same resistance and the same current flows through them, they would show same brightness

$$c) R_2 = \frac{V^2}{P} = \frac{144}{72} = 2 \Omega$$

$$P = I^2 R$$

$$I_1 = I_2$$

$$R_1 > R_2$$

Bulb 1 would burn brighter.

Practice (a)

1.

$$(a) I_1 = I_2 + I_3$$

$$I_1 > I_2, I_1 > I_3$$

$$P = I^2 R$$

So bulb 1 is ~~lighter~~ brightest

(b) bulb 1 is brighter, bulb 3 is less brighter.

the resistance of bulb 2 is reduced to $1/2$,
Then ~~the~~, I_1 increases, V_1 increases, V_3 decreases,

$P_1 = I_1^2 R_1$, $P_3 = \frac{V_3^2}{R_3}$, So bulb 1 is brighter,
bulb 3 is less brighter.

2.

$$(a) C = \frac{2\epsilon_0 A}{d_0}$$

$$E = \frac{1}{2} \frac{Q^2}{C} = \frac{d_0}{4\epsilon_0 A} Q^2$$

$$(b) U = \frac{Q^2}{C} = \frac{d_0 Q^2}{2\epsilon_0 A} \text{ is unchanged}$$

After separating,

$$\frac{1}{C'} = \frac{1}{C_{\text{glass}}} + \frac{2}{C_{\text{air}}} = \frac{d_0}{2\epsilon_0 A} + \frac{2}{\frac{\epsilon_0 A}{d_0/2}} = \frac{3d_0}{2\epsilon_0 A}$$

①

$$U_{\text{stored}} = \frac{1}{2} C U^2$$

$$= \frac{1}{2} \frac{\epsilon_0 A}{d_0} \left(\frac{d_0 Q}{\epsilon_0 A} \right)^2$$

$$= \frac{d_0}{2 \epsilon_0 A} Q^2$$

3.

(a) ~~$\Delta V = U_c$
 $= I_c R$
 $= -C \frac{dU_c}{dt} R$~~

$$\Delta V - I_c R = U_c$$

$$\Delta V - C \frac{dU_c}{dt} R = U_c$$


$$\Rightarrow U_c = \Delta V (1 - e^{-\frac{t}{CR}})$$

~~$U_c = I_c R$~~

~~$U_c = C \frac{dU_c}{dt} R$~~

~~$\Rightarrow U_c = \Delta V (1 - e^{-\frac{t}{CR}})$~~

$$Q = C U_c = C \Delta V (1 - e^{-\frac{t}{CR}})$$



$$(b) P = U_c I_c$$

$$= \Delta V (1 - e^{-\frac{t}{cr}}) \frac{\Delta V}{r} e^{-\frac{t}{cr}}$$

$$\text{So when } 1 - e^{-\frac{t}{cr}} = e^{-\frac{t}{cr}}$$

P gets maximum.

$$\Rightarrow t = cr \ln 2$$

$$= 100 \times 10^{-6} \times 10 \times 10^3 \ln 2$$

$$= \ln 2 \text{ (s)}$$

$$(c) P_{\max} = \frac{1}{4} \frac{\Delta V^2}{r} = \frac{1}{4} \frac{4000^2}{10 \times 10^3} = 400 \text{ W}$$

4.

(a) ~~$V_{\min} = 300 \text{ V}$~~ $V_{\min} = 150 \text{ V}$
 ~~$V_{\max} = 300 \text{ V}$~~ $V_{\max} = 150 \text{ V}$

(b) $V_{\min} = 300 \text{ V}$

$$V_{\max} = 0 \text{ V}$$

~~scribble~~

(C)

before foil jumps

$$E = \frac{\Delta V}{d}$$

$$F = QE = \frac{Q\Delta V}{d}$$