

PRACTICE FINAL
MATH 18.022, MIT, AUTUMN 10

You have three hours. This test is closed book, closed notes, no calculators.

Name: MODEL ANSWERS

Signature: _____

Recitation Time: _____

There are 10 problems, and the total number of points is 200. Show all your work. *Please make your work as clear and easy to follow as possible.*

Problem	Points	Score
1	20	
2	20	
3	20	
4	20	
5	20	
6	20	
7	20	
8	20	
9	20	
10	20	
Total	200	

1. (20pts) Find the shortest distance between the line l given parametrically by

$$(x, y, z) = (1 + 2t, -3 + t, 2 - t),$$

and the intersection of the two planes Π_1 and Π_2 given by the equations

$$x + y + z = 3 \quad \text{and} \quad x - 2y + 3z = 2.$$

• Line where Π_1 and Π_2 intersect is

$$(x, y, z) = (1, 1, 1) + t(5, -2, -3) = (1 + 5t, 1 - 2t, 1 - 3t)$$

point satisfying both
plane equations,
found by inspection

vector perpendicular to $(1, 1, 1)$ and $(1, -2, 3)$

$$(1, 1, 1) \times (1, -2, 3) = \begin{vmatrix} i & j & k \\ 1 & 1 & 1 \\ 1 & -2 & 3 \end{vmatrix} = (5, -2, -3)$$

• Shortest distance between two skew lines is

$$d = \left\| \text{proj}_{\vec{n}} \vec{B}_1 \vec{B}_2 \right\| = \left\| \left(\frac{\vec{n} \cdot \vec{B}_1 \vec{B}_2}{\vec{n} \cdot \vec{n}} \right) \vec{n} \right\| = \left\| \frac{13}{107} (-5, 1, -9) \right\| = \boxed{\frac{13}{\sqrt{107}}}$$

vector perpendicular
to $(2, 1, -1)$ and $(5, -2, -3)$

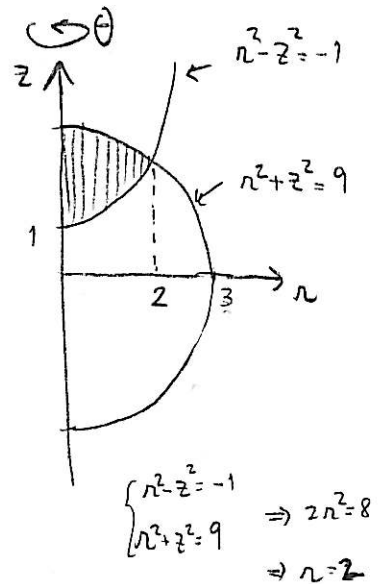
$$\vec{B}_1 \vec{B}_2 = (1, 1, 1) - (1, -3, 2) = (0, 4, -1)$$

$$(2, 1, -1) \times (5, -2, -3) = \begin{vmatrix} i & j & k \\ 2 & 1 & -1 \\ 5 & -2 & -3 \end{vmatrix} = (-5, 1, -9)$$

2. (20pts) Let W be the solid inside the sphere $x^2 + y^2 + z^2 = 9$ and above the top sheet of the hyperboloid $x^2 + y^2 - z^2 = -1$.

(a) Set up an integral in cylindrical coordinates for evaluating the volume of W .

$$\text{Vol } W = \int_0^{2\pi} \int_0^2 \int_{\sqrt{r^2+1}}^{\sqrt{9-r^2}} r \, dz \, dr \, d\theta$$



(b) Evaluate this integral.

$$\text{Vol } W = 2\pi \int_0^2 (\sqrt{9-r^2} - \sqrt{r^2+1}) r \, dr$$

$$= -\frac{2\pi}{3} \left((9-r^2)^{3/2} + (r^2+1)^{3/2} \right) \Big|_{r=0}^2$$

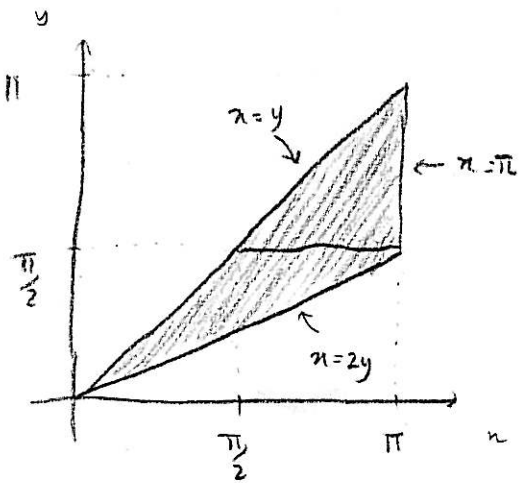
$$= -\frac{2\pi}{3} \left(5^{3/2} + 5^{3/2} - 9^{3/2} - 1^{3/2} \right)$$

$$= -\frac{2\pi}{3} (2\sqrt{5}^3 - 28)$$

$$= \boxed{\frac{4\pi}{3} (14 - \sqrt{5}^3)}$$

3. (20pts) Evaluate

$$\int_0^{\pi/2} \left(\int_y^{2y} \frac{\sin x}{x} dx \right) dy + \int_{\pi/2}^{\pi} \left(\int_y^{\pi} \frac{\sin x}{x} dx \right) dy.$$



cannot integrate directly

change order of integration:

$$\int_0^{\pi} \int_{\frac{x}{2}}^x \frac{\sin x}{x} dy dx = \int_0^{\pi} \frac{\sin x}{x} \left(x - \frac{x}{2} \right) dx$$

$$= \int_0^{\pi} \frac{\sin x}{2} dx$$

$$= \frac{1}{2} \left(-\cos x \Big|_{x=0}^{\pi} \right)$$

$$= \frac{1}{2} (1+1)$$

$$= 1 \quad 3$$

4. (20pts) Let $\vec{r}: I \rightarrow \mathbb{R}^3$ be a regular smooth curve parametrised by arclength. Let $a \in I$ and suppose that

$$\vec{T}(a) = \frac{4}{9}\hat{i} - \frac{7}{9}\hat{j} - \frac{4}{9}\hat{k}, \quad \vec{N}(a) = \frac{1}{9}\hat{i} - \frac{4}{9}\hat{j} + \frac{8}{9}\hat{k}, \quad \frac{d\vec{N}}{ds}(a) = -\frac{4}{3}\hat{i} + \frac{1}{3}\hat{j} + \frac{1}{3}\hat{k}.$$

Find:

(i) the unit binormal vector $\vec{B}(a)$.

$$\vec{B}(a) = \vec{T}(a) \times \vec{N}(a) = \begin{vmatrix} \hat{i} & \hat{j} & \hat{k} \\ \frac{4}{9} & -\frac{7}{9} & -\frac{4}{9} \\ \frac{1}{9} & -\frac{4}{9} & \frac{8}{9} \end{vmatrix} = \frac{1}{81} (-56-16, -4-32, -16+7) = \left(-\frac{8}{9}, -\frac{4}{9}, -\frac{1}{9} \right)$$

(ii) the curvature $\kappa(a)$.

$$\vec{N}'(a) = -\kappa(a) \vec{T}(a) + \tau(a) \vec{B}(a), \quad \text{so } \vec{N}'(a) \cdot \vec{T}(a) = -\kappa(a)$$

$$\kappa(a) = -\left(-\frac{4}{3}, \frac{1}{3}, \frac{1}{3}\right) \cdot \left(\frac{4}{9}, -\frac{7}{9}, -\frac{4}{9}\right) = \frac{16}{27} + \frac{7}{27} + \frac{4}{27} = \frac{27}{27} = \boxed{1}$$

(iii) the torsion $\tau(a)$.

$$\vec{N}'(a) = -\kappa(a) \vec{T}(a) + \tau(a) \vec{B}(a), \quad \text{so } \vec{N}'(a) \cdot \vec{B}(a) = \tau(a)$$

$$\tau(a) = \left(-\frac{4}{3}, \frac{1}{3}, \frac{1}{3}\right) \cdot \left(-\frac{8}{9}, -\frac{4}{9}, -\frac{1}{9}\right) = \frac{32}{27} - \frac{4}{27} - \frac{1}{27} = \frac{27}{27} = \boxed{1}$$

5. (20pts) Let

$$S = \{(x, y, z) \in \mathbb{R}^3 \mid xy^2z^3 - x^2y^2z^2 + x^3y^3 = 1\}.$$

(a) Show that in a neighbourhood of the point $P = (1, 1, 1)$, the subset S is the graph of a smooth function $z = f(x, y)$.

$$F(x, y, z) = xy^2z^3 - x^2y^2z^2 + x^3y^3$$

$$\frac{\partial F}{\partial z}(x, y, z) = 3xy^2z^2 - 2x^2y^2z$$

$\left| \frac{\partial F}{\partial z}(1, 1, 1) \right| = 3 - 2 = 1 \neq 0$ so by the implicit function theorem, on a neighborhood of $(1, 1, 1)$, S is the

(b) Find the derivative $Df(1, 1)$.

graph of a function $z = f(x, y)$

On a neighborhood of $(x, y) = (1, 1)$, we have $F(x, y, f(x, y)) = 1$.

Applying $\frac{\partial}{\partial x}$ on both sides,

$$\frac{\partial F}{\partial x} + \frac{\partial F}{\partial z} \frac{\partial f}{\partial x} = 0, \text{ at } (1, 1) \text{ is } 2 + 1 \frac{\partial f}{\partial x}(1, 1) = 0 \Rightarrow \frac{\partial f}{\partial x}(1, 1) = -2$$

Applying $\frac{\partial}{\partial y}$ on both sides,

$$\frac{\partial F}{\partial y} + \frac{\partial F}{\partial z} \frac{\partial f}{\partial y} = 0, \text{ at } (1, 1) \text{ is } 3 + 1 \frac{\partial f}{\partial y}(1, 1) = 0 \Rightarrow \frac{\partial f}{\partial y}(1, 1) = -3$$

so $Df(1, 1) = (-2, -3)$

Auxiliary computations:

$$\frac{\partial F}{\partial x}(x, y, z) = y^2z^3 - 2xy^2z^2 + 3x^2y^3$$

$$\frac{\partial F}{\partial y}(x, y, z) = 2xy^2z^3 - 2x^2yz^2 + 3x^3y^2$$

6. (20pts) Let K be the solid bounded by the four planes $x = 0$, $y = 0$, $z = 0$ and $x + 2y + 3z = 12$ and let $f: K \rightarrow \mathbb{R}$ be the function $f(x, y, z) = xyz$.

(a) Show that f has a global maximum on K .

K is a compact set (it is closed and bounded), and f is a continuous function, so f must have a global maximum (and minimum) on K .

(b) Find this global maximum value of f on K .

$Df = (yz, xz, xy)$ does not vanish on the interior of K , so max must occur on the walls. On $x=0$, $y=0$, $z=0$ walls, $f(x, y, z) = 0$, which is not the max (f attains positive values), so we use Lagrange multipliers to find maximum of f on $x+2y+3z=12$.

$$F(x, y, z) = xyz + \lambda(x + 2y + 3z - 12)$$

$$\begin{cases} \frac{\partial F}{\partial x} = yz + \lambda = 0 \\ \frac{\partial F}{\partial y} = xz + 2\lambda = 0 \\ \frac{\partial F}{\partial z} = xy + 3\lambda = 0 \\ \frac{\partial F}{\partial \lambda} = x + 2y + 3z - 12 = 0 \end{cases}$$

$$\Leftrightarrow \begin{cases} \lambda = -yz \\ (x-2y)z = 0 \\ (x-3z)y = 0 \\ x + 2y + 3z = 12 \end{cases}$$

$$\Rightarrow \begin{cases} x = 2y \\ x = 3z \\ 3x = 12 \end{cases}$$

we don't want x, y or $z = 0$ because it would give $f = 0$, which is not a max

$$\Leftrightarrow x=4, y=2, z=\frac{4}{3}$$

$$f\left(4, 2, \frac{4}{3}\right) = \frac{32}{3}$$

7. (20pts) Let D be the region bounded by the four curves $xy = 1$, $xy = 3$, $2y = x^2$ and $y = x^2$.

(a) Compute $dx dy$ in terms of $du dv$, where $u = xy$ and $v = x^2/y$.

$$\frac{\partial(u,v)}{\partial(x,y)} = \begin{vmatrix} \frac{\partial u}{\partial x} & \frac{\partial u}{\partial y} \\ \frac{\partial v}{\partial x} & \frac{\partial v}{\partial y} \end{vmatrix} = \begin{vmatrix} y & x \\ \frac{2x}{y} & -\frac{x^2}{y^2} \end{vmatrix} = \left| -\frac{x^2}{y} - \frac{2x^2}{y} \right| = \frac{3x^2}{y} = 3v$$

$$dx dy = \frac{1}{3v} du dv$$

(b) Find the area of D .

$$\begin{aligned} \text{area } D &= \int_D dx dy \\ &= \int_1^2 \int_1^3 \frac{1}{3v} du dv \\ &= \frac{1}{3} 2 (\log v) \Big|_{v=1}^2 \\ &= \frac{2}{3} \log 2 \end{aligned}$$

8. (20pts) Find the line integral of the vector field

$$\vec{F}(x, y) = \frac{-y}{x^2 + y^2} \hat{i} + \frac{x}{x^2 + y^2} \hat{j}, = M \hat{i} + N \hat{j}$$

along the following oriented curves:

(i) The circle C_1 with equation $x^2 + y^2 = 1$, oriented counter-clockwise.

$$\oint_{C_1} \vec{F} \cdot d\vec{s} = \int_0^{2\pi} \vec{F}(\vec{r}(t)) \cdot \vec{r}'(t) dt = \int_0^{2\pi} (-\sin t, \cos t) \cdot (-\sin t, \cos t) dt = \boxed{2\pi}$$

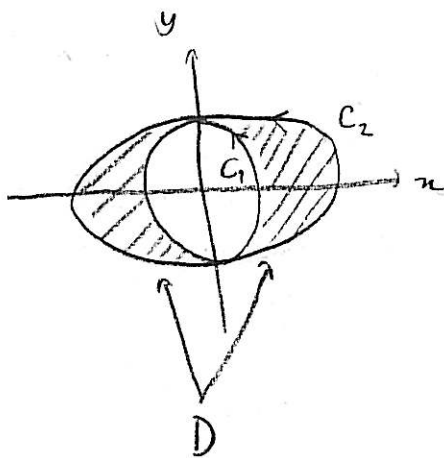
C_1 parametrized by $\vec{r}(t) = (\cos t, \sin t)$; $t \in [0, 2\pi]$

$$\vec{r}'(t) = (-\sin t, \cos t)$$

$$\vec{F}(\vec{r}(t)) = \left(\frac{-\sin t}{1}, \frac{\cos t}{1} \right) = (-\sin t, \cos t)$$

(ii) The ellipse C_2 with equation $x^2 + 2y^2 = 4$, oriented counter-clockwise.

$$\frac{\partial N}{\partial x} = \frac{\partial}{\partial x} \left(\frac{x}{x^2 + y^2} \right) = \frac{y^2 - x^2}{(x^2 + y^2)^2}, \quad \frac{\partial M}{\partial y} = \frac{\partial}{\partial y} \left(\frac{-y}{x^2 + y^2} \right) = \frac{y^2 - x^2}{(x^2 + y^2)^2}$$



$$0 = \iint_D \underbrace{\left(\frac{\partial N}{\partial x} - \frac{\partial M}{\partial y} \right)}_{=0} dA = \underbrace{\oint_{C_1} \vec{F} \cdot d\vec{s}}_{=2\pi} - \oint_{C_2} \vec{F} \cdot d\vec{s}$$

$$\Rightarrow \boxed{\oint_{C_2} \vec{F} \cdot d\vec{s} = 2\pi}$$

9. (20pts) Find the surface scalar integral

$$\iint_S (x^2 + y^2) dS,$$

where S is the sphere of radius a centred at the origin.

$$\iint_S (x^2 + y^2) dS = \int_0^{2\pi} \int_0^\pi \underbrace{a^2 \sin^2 \varphi}_{= r^2} \underbrace{a^2 \sin \varphi d\varphi d\theta}_{dS \text{ for a spherical surface}}$$

$$= 2\pi a^4 \int_0^\pi \sin^3 \varphi d\varphi$$

$$= 2\pi a^4 \int_0^\pi (1 - \cos^2 \varphi) \sin \varphi d\varphi$$

$$= 2\pi a^4 \left((-\cos \varphi) \Big|_{\varphi=0}^{\pi} + \left(\frac{\cos^3 \varphi}{3} \Big|_{\varphi=0}^{\pi} \right) \right)$$

$$= 2\pi a^4 \left((0+1) + \frac{1}{3}(0-1) \right)$$

$$= \boxed{\frac{4}{3} \pi a^4}$$

10. (20pts) A smooth vector field is defined on the whole of \mathbb{R}^3 , except two lines L and M , which intersect at the point P . Suppose that $\text{curl } \vec{F} = 0$, and that

$$\int_{C_1} \vec{F} \cdot d\vec{s} = -2, \quad \int_{C_2} \vec{F} \cdot d\vec{s} = 3 \quad \text{and} \quad \int_{C_3} \vec{F} \cdot d\vec{s} = 1.$$

Find the following integrals. Give your reasons.

(a)

$$\int_{C_4} \vec{F} \cdot d\vec{s}.$$

$$0 = \iint_{S_{\text{top}}} \overbrace{\nabla \times \vec{F}}^{=0} \cdot d\vec{S} = -\oint_{C_1} \vec{F} \cdot d\vec{s} - \oint_{C_2} \vec{F} \cdot d\vec{s} + \oint_{C_4} \vec{F} \cdot d\vec{s} = 2 - 3 + \oint_{C_4} \vec{F} \cdot d\vec{s}$$

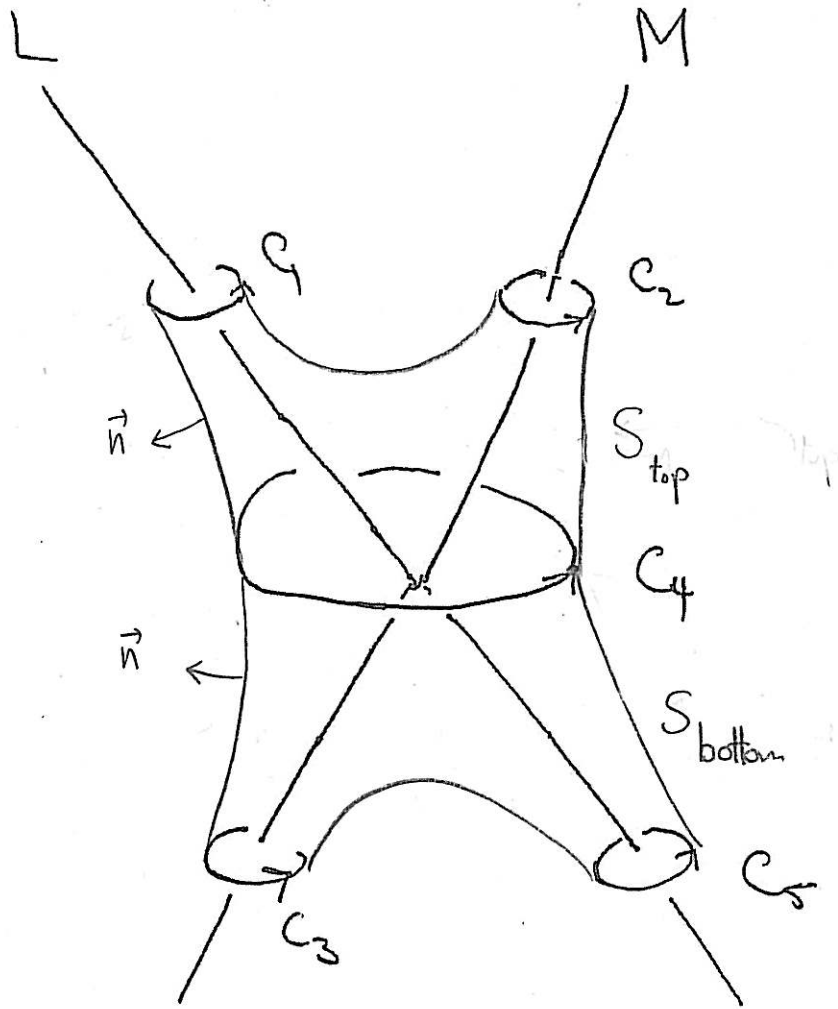
$$\Rightarrow \boxed{\oint_{C_4} \vec{F} \cdot d\vec{s} = 1}$$

(b)

$$\int_{C_5} \vec{F} \cdot d\vec{s}.$$

$$0 = \iint_{S_{\text{bottom}}} \overbrace{\nabla \times \vec{F}}^{=0} \cdot d\vec{S} = -\oint_{C_4} \vec{F} \cdot d\vec{s} + \oint_{C_3} \vec{F} \cdot d\vec{s} + \oint_{C_5} \vec{F} \cdot d\vec{s} = -1 + 1 + \oint_{C_5} \vec{F} \cdot d\vec{s}$$

$$\Rightarrow \boxed{\oint_{C_5} \vec{F} \cdot d\vec{s} = 0}$$



MIT OpenCourseWare
<http://ocw.mit.edu>

18.022 Calculus of Several Variables
Fall 2010

For information about citing these materials or our Terms of Use, visit: <http://ocw.mit.edu/terms>.